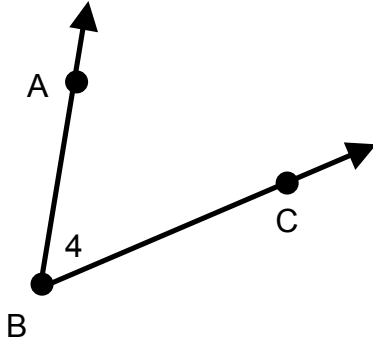


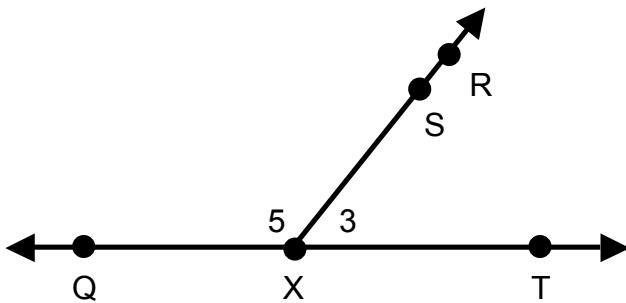
For each indicated angle:

- Give at least 2 other names for the angle
- List the vertex
- List the two rays that form the angle
- Use a protractor to find the measure of the angle
- Classify the angle as acute, right, or obtuse.

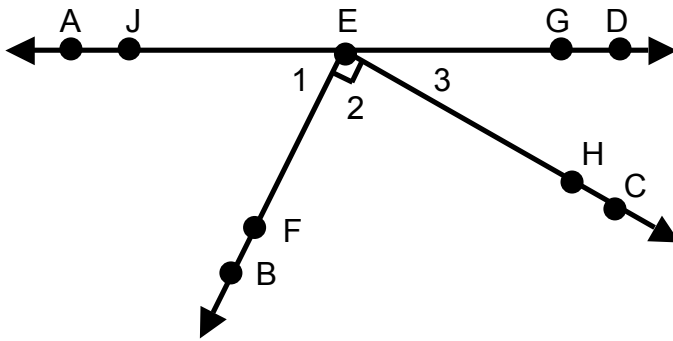
1.  $\sphericalangle ABC$



2.  $\sphericalangle 5$



3.  $\sphericalangle$ BEH



4.  $\sphericalangle$ 1

